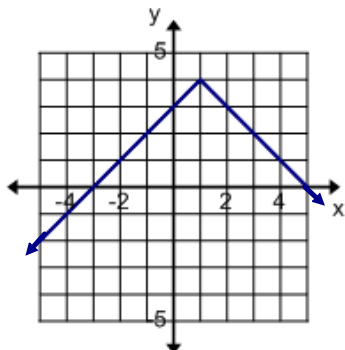


Domain & Range

Date: _____
(Every lesson)

Ex.1: Describe the following graph's location on the axes in words.



We can describe relations mathematically using Domain & Range.

Domain: The set of x -values that form a relation.

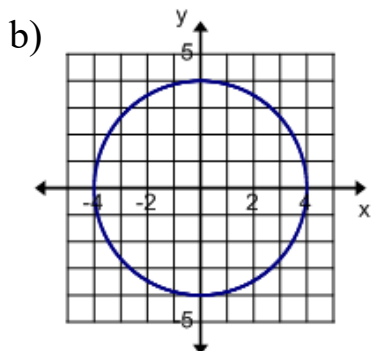
Range: The set of y -values that form a relation.

Ex.2: State the Domain & Range for the following relations.

a) $\{(3, 2), (4, 2), (1, -1), (-1, 1), (3, 5)\}$

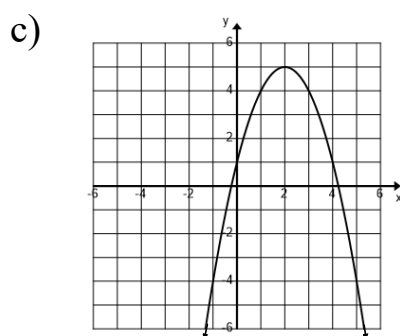
Domain: $\{$

Range: $\{$



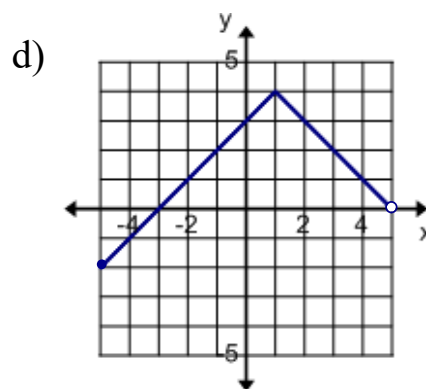
D: $\{$

R: $\{$



D: $\{$

R: $\{$



D: $\{$

R: $\{$